

York University BPHS 3090 (Winter 2014) - HW 5

Due Date: Mar. 13, 2020 1:30 PM

Questions

1. Assume that an action potential is traveling at constant velocity, v , in the positive z -direction along an axon. Assume that the core conductor model is valid so that

$$\frac{\partial^2 V_m(z, t)}{\partial z^2} = (r_i + r_o) K_m(z, t)$$

The waveshape of the action potential at one point in space, $z = z_0$ is shown in the figure below

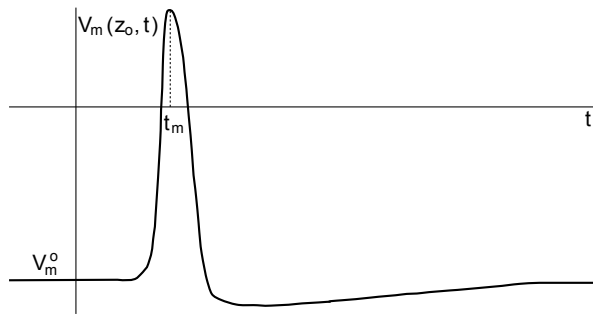


Figure 1: Waveform of a propagated action potential

- a) Sketch $K_m(z, t)$ on the same time scale as $V_m(z_0, t)$.
- b) Prove that one cannot account for $K_m(z, t)$ by assuming that the membrane can be represented by the equivalent circuit for an incremental element of length δz shown in the figure below. g_m and c_m are constant conductances and capacitances per unit length. [HINT: Consider the polarity of the current through the parallel combination of g_m and c_m prior to the time of occurrence of the peak of the action potential, t_m .]

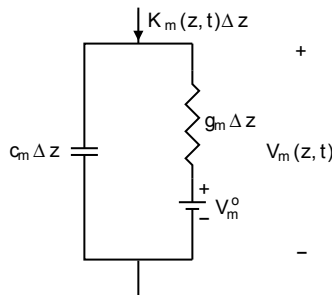


Figure 2: Equivalent network for the membrane of an axon.

2. A cylindrical fibre's membrane has a certain radius r . The extracellular volume is outside the membrane extending to a radius of twice this amount. It can be noted that the membrane itself is considered to have negligible thickness relative to r . The membrane resistance at rest is $2 \text{ k}\Omega \cdot \text{cm}^2$, the membrane capacitance is $1.2 \mu\text{F} / \text{cm}^2$, the intracellular resistivity is $100 \Omega \cdot \text{cm}$, the extracellular resistivity is $40 \Omega \cdot \text{cm}$ and the radius is $50 \mu\text{m}$. Find each of the following values listed below along with their corresponding units, and ensure to use the linear core-conductor model.

- What is the membrane resistance per unit length?
- What is the membrane capacitance per unit length?
- What is the intracellular resistance per unit length?
- What is the extracellular resistance per unit length?

3. The following two experiments are performed on a squid giant axon:

- Experiment #1:* The axon is placed in a large volume of sea water, and the size of the *transmembrane* action potential is measured by means of an intracellular micropipette and is found to have a peak-to-peak value of 100 mV. The conduction velocity is 36 m/s.
- Experiment #2:* The axon is placed in oil and the transmembrane potential is still found to 100 mV peak-to-peak. The peak-to-peak size of the *extracellular* action potential is 75 mV.

Estimate the expected conduction velocity in Experiment # 2. State your assumptions.

4. A cylindrical cell has a diameter of $500 \mu\text{m}$ and a length equal to $L = 4 \text{ cm}$. After brief experimentation, it is discovered that the cell has the following cable parameters: A membrane conductance $g_m = 100 \frac{\mu\text{S}}{\text{cm}}$, a membrane capacitance $c_m = 150 \frac{\text{nF}}{\text{cm}}$, and an internal resistance $r_i = 10 \frac{\text{k}\Omega}{\text{cm}}$ such that $r_0 \ll r_i$. Two experiments are later conducted:

- Experiment #1:* The cell is impaled, as seen in the top image in the following figure, with a micropipette at its center so that the membrane potential could be measured
- Experiment #2:* Axial electrodes are impaled, as seen in the bottom image in the following figure, along the length of the cell to record the potential across the membrane - these electrodes have a resistance per unit length $r = 5 \frac{\Omega}{\text{cm}}$.

- Determine the cell space constant and the membrane time constant
- Given the set-up of the experiment 1 explained above, determine the measured potential across the membrane at $z = 0$ (i.e determine $v_m(0, t)$)
- Given the set-up of the experiment 2 explained above, determine the measured potential across the membrane at $z = 0$ (i.e determine $v_m(0, t)$)

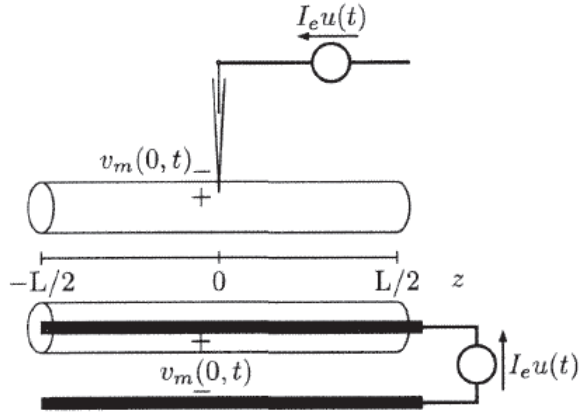


Figure 3: Image denoting the two conducted experiments with the given cylindrical cell with (top) a micropipette and with (bottom) an axial electrode

5. In a first year physics course, one learns that an electrical network is an interconnection of electrical elements within a given circuit consisting of a closed loop to allow for a return path for the current.. In other words, the current has a return path such that the charge can 'flow' throughout the circuit. Below is a figure from Weiss' book denoting an experiment in which the membrane potential is monitored as pulses of current are passed through a given cell. Does this system represent a 'circuit'? If so, sketch what the circuit looks like. If not, explain why.

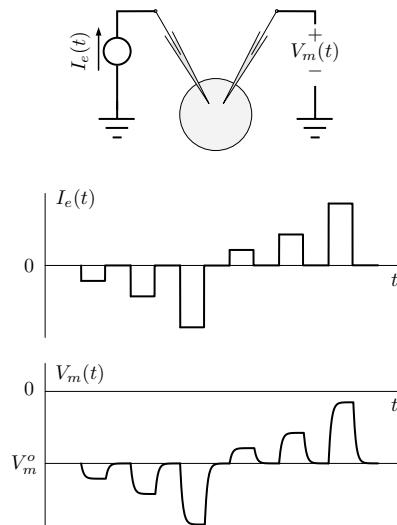


Figure 1.1