

# PHYS 2010 (W20)

## Classical Mechanics

**Due 2020.02.07**

**HW3**

Christopher Bergevin  
York University, Dept. of Physics & Astronomy  
Office: Petrie 240 Lab: Farq 103  
cberge@yorku.ca

Ref. (re images):  
Knudsen & Hjorth (2000), Kesten &  
Tauck (2012)

## Problem 1

Given the time-varying vector

$$\mathbf{A} = \mathbf{i}\alpha t + \mathbf{j}\beta t^2 + \mathbf{k}\gamma t^3$$

where  $\alpha$ ,  $\beta$ , and  $\gamma$  are constants, find the first and second time derivatives  $d\mathbf{A}/dt$  and  $d^2\mathbf{A}/dt^2$ .

## Problem 2

A small ball is fastened to a long rubber band and twirled around in such a way that the ball moves in an elliptical path given by the equation

$$\mathbf{r}(t) = \mathbf{i}b \cos \omega t + \mathbf{j}2b \sin \omega t$$

where  $b$  and  $\omega$  are constants. Find the speed of the ball as a function of  $t$ . In particular, find  $v$  at  $t = 0$  and at  $t = \pi/2\omega$ , at which times the ball is, respectively, at its minimum and maximum distances from the origin.

### Problem 3

A particle of mass  $m$  is released from rest a distance  $b$  from a fixed origin of force that attracts the particle according to the inverse square law:

$$F(x) = -kx^{-2}$$

Show that the time required for the particle to reach the origin is

$$\pi \left( \frac{mb^3}{8k} \right)^{1/2}$$

Hint: Treat this as a 1-D problem. Then just integrate. And integrate. And integrate some more!

## Problem 4

A surface-going projectile is launched horizontally on the ocean from a stationary warship, with initial speed  $v_0$ . Assume that its propulsion system has failed and it is slowed by a retarding force given by  $F(v) = -Ae^{\alpha v}$ . **(a)** Find its speed as a function of time,  $v(t)$ . Find **(b)** the time elapsed and **(c)** the distance traveled when the projectile finally comes to rest.  $A$  and  $\alpha$  are positive constants.

Hint: There are a handful of ways to solve the ODE that arises in part a (e.g., make a substitution  $u = e^{\alpha v}$ ). You should end up with something not too messy that has an  $\ln$ ...

## Problem 5

Consider the two force functions

(a)  $\mathbf{F} = \mathbf{i}x + \mathbf{j}y$

(b)  $\mathbf{F} = \mathbf{i}y - \mathbf{j}x$

Verify that (a) is conservative and that (b) is nonconservative by showing that the integral  $\int \mathbf{F} \cdot d\mathbf{r}$  is independent of the path of integration for (a), but not for (b), by taking two paths in which the starting point is the origin  $(0, 0)$ , and the endpoint is  $(1, 1)$ . For one path take the line  $x = y$ . For the other path take the  $x$ -axis out to the point  $(1, 0)$  and then the line  $x = 1$  up to the point  $(1, 1)$ .



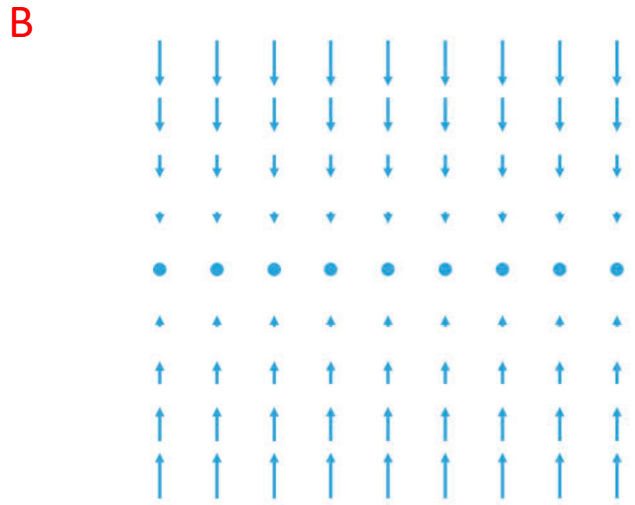

## Problem 6

Show that the vector field  $\vec{F}(x, y) = y \cos x \vec{i} + (\sin x + y) \vec{j}$  is path-independent.

Hint: Suppose there is a potential function. What assumptions can you make then about that function?

Problem 7

Indicate which vector fields are *conservative* and briefly justify.





## Problem 8

The sun is about 25,000 light years from the center of the galaxy and travels approximately in a circle with a period of 170,000,000 years. The earth is 8 light minutes from the sun. From these data alone, find the approximate gravitational mass of the galaxy in units of the sun's mass. You may assume that the gravitational force on the sun may be approximated by assuming that all the mass of the galaxy is at its center.

Hint: Connections between centripetal accelerations and Newtons' Law of Gravitation?

## Problem 9

An Olympic diver of mass  $m$  begins his descent from a 10 meter high diving board with zero initial velocity.

(a) Calculate the velocity  $V_0$  on impact with the water and the approximate elapsed time from dive until impact (use any method you choose).

Assume that the buoyant force of the water balances the gravitational force on the diver and that the viscous force on the diver is  $bv^2$ .

(b) Set up the equation of motion for vertical descent of the diver through the water. Solve for the velocity  $V$  as a function of the depth  $x$  under water and impose the boundary condition  $V = V_0$  at  $x = 0$ .

(c) If  $b/m = 0.4 \text{ m}^{-1}$ , estimate the depth at which  $V = V_0/10$ .

(d) Solve for the vertical depth  $x(t)$  of the diver under water in terms of the time under water.

Hint: Once the diver is in the water, the force due to gravity will be counterbalanced by buoyancy (i.e., only drag will create a non-zero net force). As for (d), you've seen something like this before....

## Bonus

A gun is located at the bottom of a hill of constant slope  $\phi$ . Show that the range of the gun measured up the slope of the hill is

$$\frac{2v_0^2 \cos \alpha \sin(\alpha - \phi)}{g \cos^2 \phi}$$

where  $\alpha$  is the angle of elevation of the gun, and that the maximum value of the slope range is

$$\frac{v_0^2}{g(1 + \sin \phi)}$$

Hint: Note that  $\alpha$  is relative to flat ground (not the hill). Drawing a diagram helps. Also, trig identities such as  $\sin(\alpha + \theta)$  or the like might be useful